




Name:


Class:

Instruction : Color the correct answer.

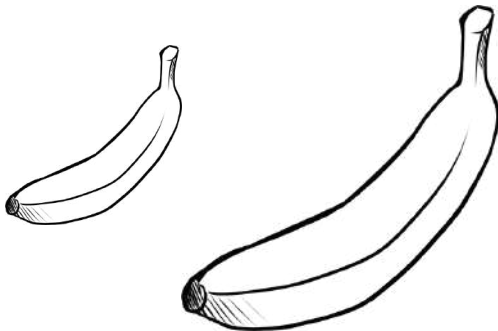
Which snake is shorter?



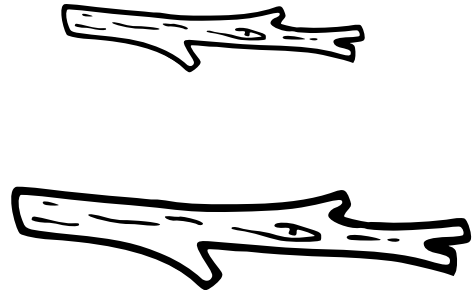
Which pencil is longer?



Which banana is shorter?



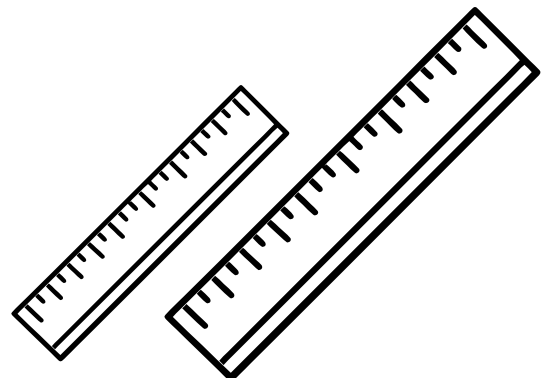
Which stick is longer?



Which car is shorter?



Which ruler is longer?

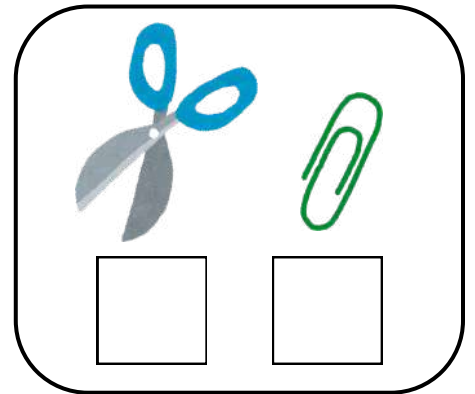
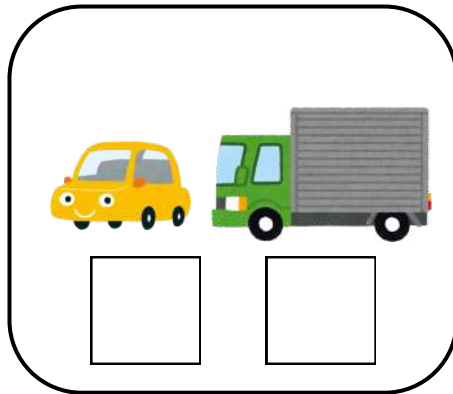
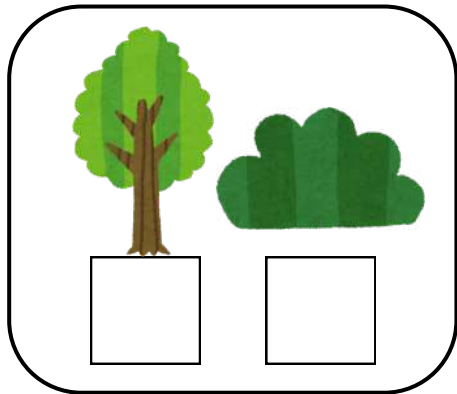
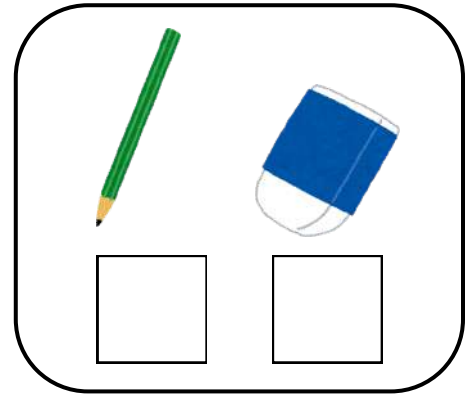

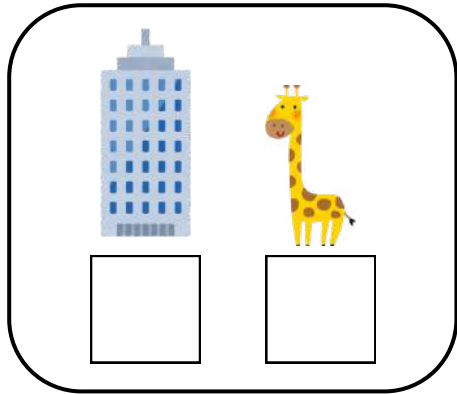






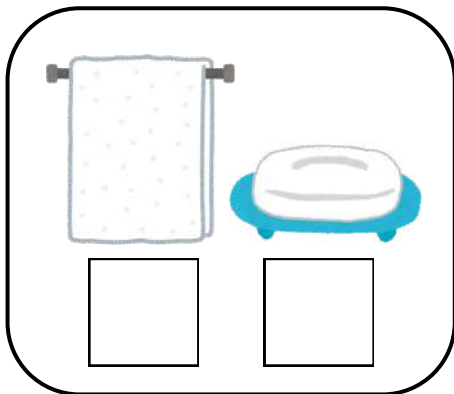

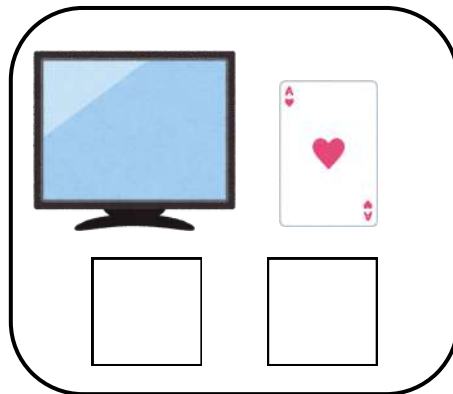
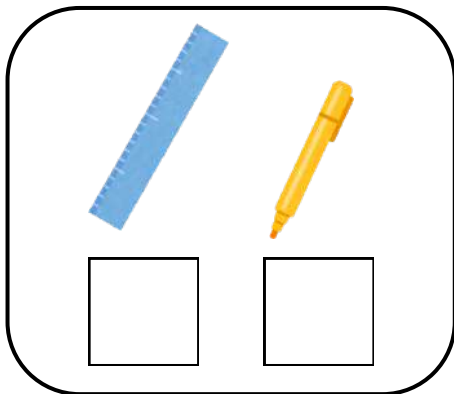
Name:

Class:

Instruction : Tick the taller picture.



Instruction : Tick the shorter picture.



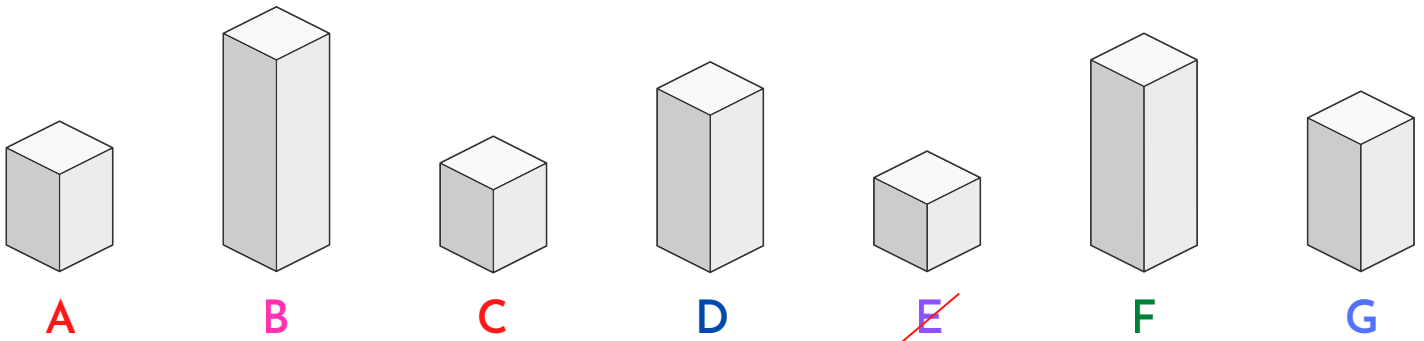


Name:

Class:

Instruction : Sort the towers from shortest to longest.

1 2 3 4 5 6 7
 (E) ○ ○ ○ ○ ○ ○



Instruction : Read each sentence carefully. Write True if the statement is correct and False if it is incorrect.

	True	False
• There are 100 centimeters in 1 meter.	<input type="checkbox"/>	<input type="checkbox"/>
• The length of a pencil is measured in Kilometers (km).	<input type="checkbox"/>	<input type="checkbox"/>
• 500 meters is equal to half a kilometer.	<input type="checkbox"/>	<input type="checkbox"/>
• The distance between two cities is measured in Kilometers (km).	<input type="checkbox"/>	<input type="checkbox"/>
• 200 cm is the same as 2 meters.	<input type="checkbox"/>	<input type="checkbox"/>
• It is appropriate to measure the length of an ant in Meters (m).	<input type="checkbox"/>	<input type="checkbox"/>
• 1000 meters make 1 Kilometer.	<input type="checkbox"/>	<input type="checkbox"/>
• A standard short scale in a geometry box is 15 cm long.	<input type="checkbox"/>	<input type="checkbox"/>
• 3 m 45 cm is equal to 345 cm.	<input type="checkbox"/>	<input type="checkbox"/>



Name:

Class:

Instruction : Fill in the empty spaces with the correct word or number. Use units like cm, m, or km where necessary.

1. The standard unit for measuring long distances between cities is _____.
2. 1 kilometer is equal to _____ meters.
3. To measure the length of a small eraser, we use _____.
4. There are _____ centimeters in 5 meters.
5. A door is usually 2 _____ high.
6. Half of a kilometer is _____ meters.
7. 10 millimeters make 1 _____.
8. The length of a playground is measured in _____.
9. 700 cm is the same as _____ meters.
10. A _____ is used by a tailor to measure your waist.
11. 1500 meters is equal to 1 km and _____ meters.
12. The distance from your thumb to your elbow is measured in _____.
13. 4000 meters is equal to _____ kilometers.
14. A long jump distance is usually measured in _____.
15. 1 meter is _____ times bigger than 1 centimeter.

Instruction : Convert the following measurements into the units asked. Show your calculation if needed.

• Convert 3 meters into centimeters:

• Convert 500 centimeters into meters:

• Convert 2 kilometers into meters:

• Convert 9 meters into centimeters:

• Convert 3500 meters into kilometers and meters: