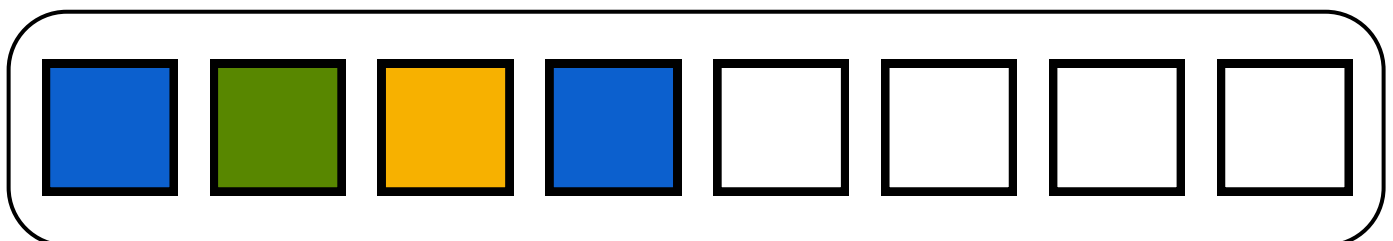
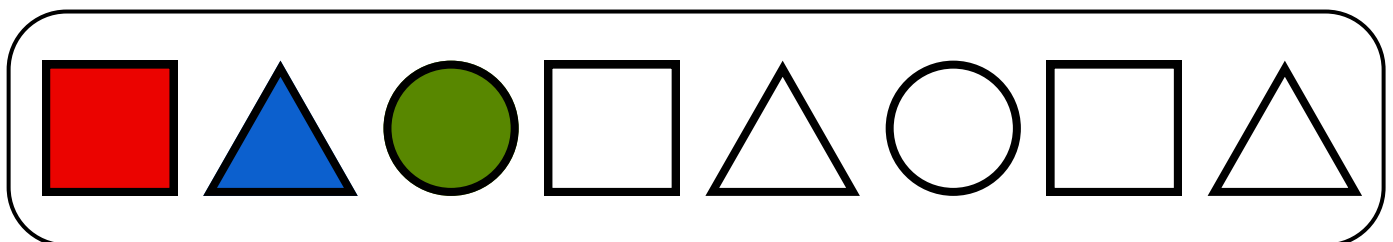
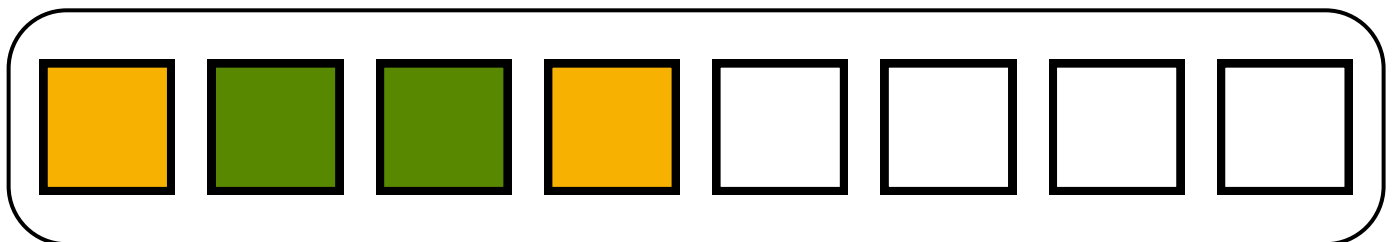
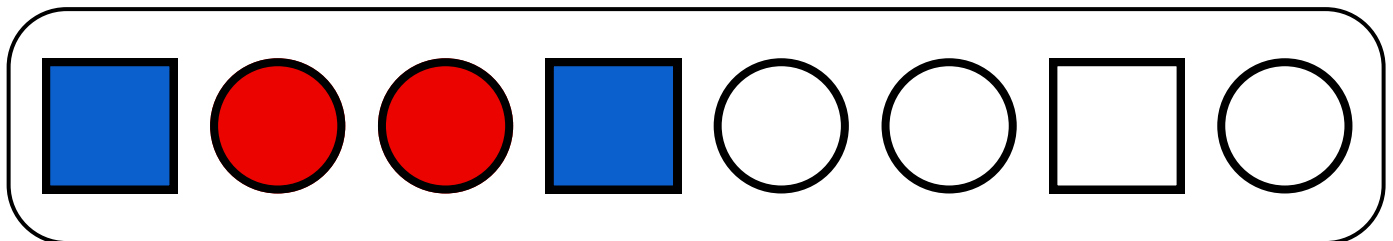
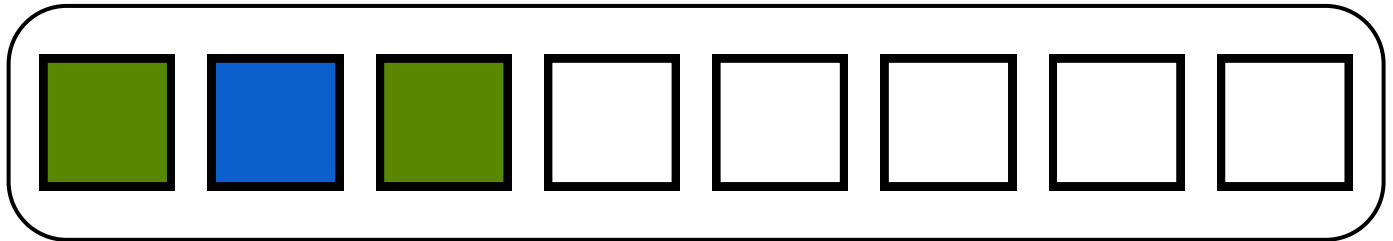
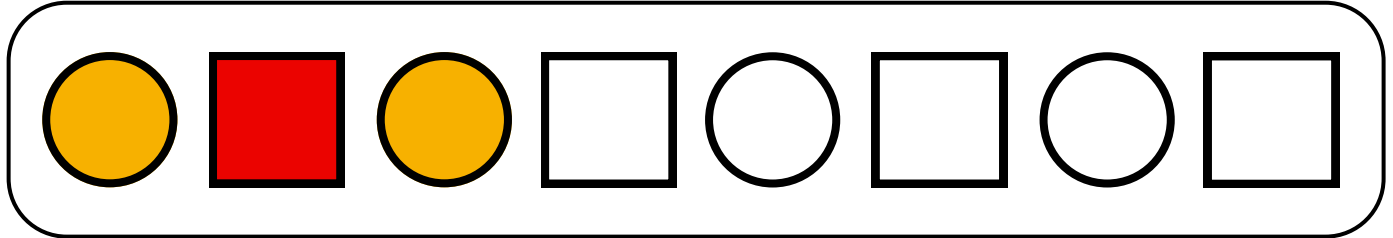


Name:

Class:


















































What comes next? Color in the shapes.



Name:

Class:

Complete the pattern by drawing the next shape

Name:

Class:

Find out the missing numbers and figure out what the pattern rule is for each box

17, 20, 23, 26, 29, __, __, __

25, 30, 35, 40, 45, __, __, __

__, __, __, 60, 70, 80, 90, 100

8, __, 24, __, 40, __, __, 64

__, __, __, 36, 45, 54, 63, 72

15, 17, 19, 21, 23, __, __, __

25, 35, 45, 55, 65, __, __, __

__, __, __, 24, 30, 36, 42, 48

Name:

Class:

What comes next? calculate and fill number in the empty box.

1. 12, 24, 36

--	--	--	--	--	--

2. 10, 20, 30

--	--	--	--	--	--

3. 7, 14, 21

--	--	--	--	--	--

4. 8, 16, 21

--	--	--	--	--	--

5. 5, 10, 15

--	--	--	--	--	--

6. 6, 12, 18

--	--	--	--	--	--

7. 11, 22, 33

--	--	--	--	--	--

8. 9, 18, 27

--	--	--	--	--	--

9. 3, 6, 9

--	--	--	--	--	--

10. 4, 8, 12

--	--	--	--	--	--