

Name:

Class:

Fill in the number that comes between.

1		3
---	--	---

13		15
----	--	----

5		7
---	--	---

10		12
----	--	----

0		2
---	--	---

11		13
----	--	----

4		6
---	--	---

15		17
----	--	----

2		4
---	--	---

12		14
----	--	----

7		9
---	--	---

14		16
----	--	----

3		5
---	--	---

16		18
----	--	----

6		8
---	--	---

19		21
----	--	----

8		10
---	--	----

22		24
----	--	----

9		11
---	--	----

25		27
----	--	----

Name:

Class:

Fill in the number that comes between.

28		30
----	--	----

58		60
----	--	----

31		33
----	--	----

61		63
----	--	----

34		36
----	--	----

64		66
----	--	----

37		39
----	--	----

67		69
----	--	----

40		42
----	--	----

70		72
----	--	----

43		45
----	--	----

73		75
----	--	----

46		48
----	--	----

76		78
----	--	----

49		51
----	--	----

79		81
----	--	----

52		54
----	--	----

82		84
----	--	----

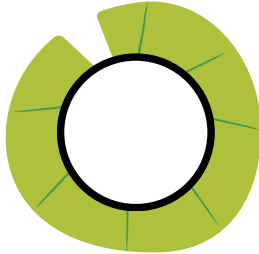
55		57
----	--	----






85		87
----	--	----


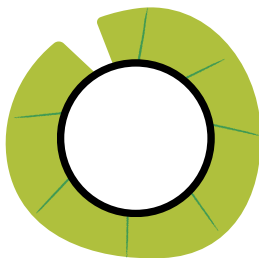

Name:




Class:



Fill in the number that comes between. (1 to 20)

				
---	---	---	--	---

				
---	---	---	--	---

				
--	--	--	---	--

		
---	--	---








	
--	---



Name:

Class:











Write the number that comes in between.



Name:

Class:

Write the number that comes in between.



Name:

Class:

Write the number that comes in between. (1 - 25)



Name:

Class:

Write the number that comes in between.

1		3		5		7
---	--	---	--	---	--	---

8		10		12		14
---	--	----	--	----	--	----

15		17		19		21
----	--	----	--	----	--	----

22		24		26		28
----	--	----	--	----	--	----

29		31		33		35
----	--	----	--	----	--	----

36		38		40		42
----	--	----	--	----	--	----

43		45		47		49
----	--	----	--	----	--	----

50		52		54		56
----	--	----	--	----	--	----

Name:

Class:

Write the number that comes in between.

57		59		61		63
----	--	----	--	----	--	----

64		66		68		70
----	--	----	--	----	--	----

71		73		75		77
----	--	----	--	----	--	----

78		80		82		84
----	--	----	--	----	--	----

85		87		89		91
----	--	----	--	----	--	----




92		94		96		98
----	--	----	--	----	--	----

99		101
----	--	-----

Name:

Class:

Write the number that comes in between.



Name:

Class:

Write the number that comes in between.

1	2	3	4		6	7	8	9	10
11		13		15		17		19	20
21		23	24	25		27	28		30
31		33		35	36	37	38	39	40
41	42		44		46		48		50
51		53		55		57	58		60
61	62		64		66				70
71		73		75	76		78		80
81	82		84	85		87		89	90
91		93	94		96		98		100

Name:

Class:

Match all the numbers in between.

1		3	27
15		17	39
26		28	3
64		66	43
18		20	87
42		44	16
38		40	65
86		88	19

Name:

Class:

Make a circle on the correct option.

- What number comes between 3 and 5?
a) 2 c) 6
b) 4 d) 5
- What number is between 10 and 12?
a) 8 c) 11
b) 9 d) 13
- Which number comes between 15 and 17?
a) 14 c) 18
b) 16 d) 13
- Which number is between 20 and 22?
a) 19 c) 23
b) 21 d) 24
- What number comes between 7 and 9?
a) 6 c) 10
b) 8 d) 5
- Find the number between 30 and 32.
a) 29 c) 33
b) 31 d) 34
- Which number lies between 40 and 42?
a) 39 c) 43
b) 41 d) 44
- What number is between 50 and 52?
a) 49 c) 53
b) 51 d) 54

Name:

Class:

Make a circle on the correct option.

- Find the number between 60 and 62.
a) 59 c) 63
b) 61 d) 58
- What number comes between 1 and 3?
a) 0 c) 4
b) 2 d) 5
- Which number is between 25 and 27?
a) 24 c) 28
b) 26 d) 29
- What number lies between 100 and 102?
a) 99 c) 103
b) 101 d) 104
- What number is between 13 and 15?
a) 14 c) 16
b) 12 d) 10
- Which number comes between 9 and 11?
a) 10 c) 12
b) 8 d) 7
- Find the number between 18 and 20.
a) 19 c) 17
b) 21 d) 16
- Which number is between 5 and 7?
a) 4 c) 8
b) 6 d) 9